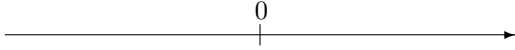


第1章 正の数、負の数 (減法1)

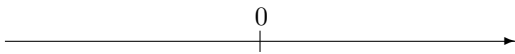
氏名 _____ 学習日 _____ 月 _____ 日

1. 次の計算をなさい。

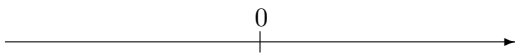
(1) $(-17) - (+9)$



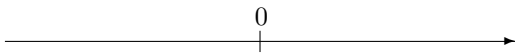
(2) $(+10) - (+12)$



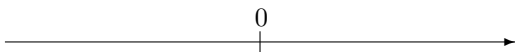
(3) $(+6) - (+17)$



(4) $(+16) - (+20)$

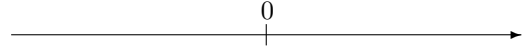


(5) $(+3) - (+3)$

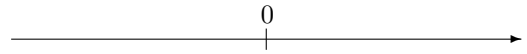


2. 次の計算をなさい。

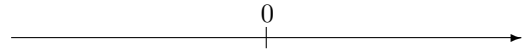
(1) $(+11) - (-10)$



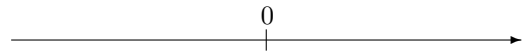
(2) $(+6) - (-12)$



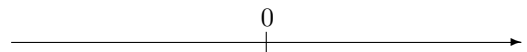
(3) $(+11) - (+4)$



(4) $(-2) - (-20)$



(5) $(+15) - (+10)$



第1章 正の数、負の数 (減法1) 解答

1. (1) -26 (2) -2 (3) -11 (4) -4 (5) 0

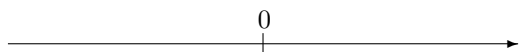
2. (1) $+1$ (2) $+18$ (3) $+7$ (4) $+18$ (5) $+5$

第1章 正の数、負の数 (減法1)

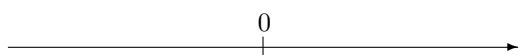
氏名 _____ 学習日 _____ 月 _____ 日

1. 次の計算をなさい。

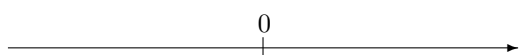
(1) $(+19) - (-2)$



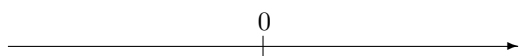
(2) $(+12) - (+15)$



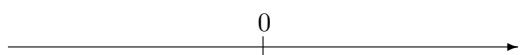
(3) $(-10) - (+19)$



(4) $(+14) - (-8)$

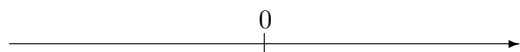


(5) $(-6) - (+4)$

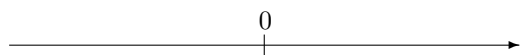


2. 次の計算をなさい。

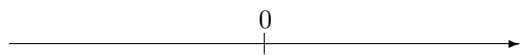
(1) $(-5) - (+15)$



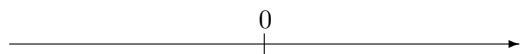
(2) $(+19) - (+11)$



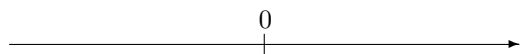
(3) $(-5) - (+12)$



(4) $(-14) - (-17)$



(5) $(-8) - (+15)$



第1章 正の数、負の数 (減法1) 解答

1. (1) +21 (2) -3 (3) -29 (4) +22 (5) -10

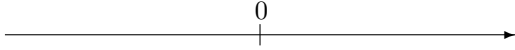
2. (1) -20 (2) +8 (3) -17 (4) +3 (5) -23

第1章 正の数、負の数 (減法1)

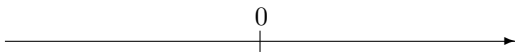
氏名 _____ 学習日 ____ 月 ____ 日

1. 次の計算をなさい。

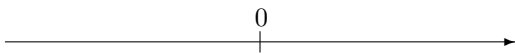
(1) $(+3) - (-14)$



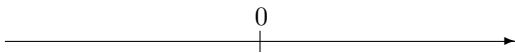
(2) $(+8) - (+9)$



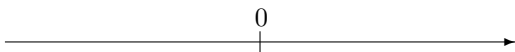
(3) $(+15) - (-13)$



(4) $(-9) - (+7)$

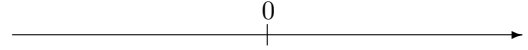


(5) $(+14) - (+7)$

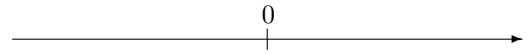


2. 次の計算をなさい。

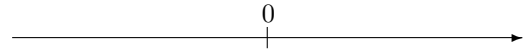
(1) $(+15) - (-10)$



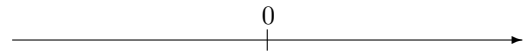
(2) $(-7) - (+13)$



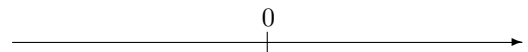
(3) $(+5) - (+18)$



(4) $(+19) - (-10)$



(5) $(+4) - (-6)$



第1章 正の数、負の数 (減法1) 解答

1. (1) +17 (2) -1 (3) +28 (4) -16 (5) +7

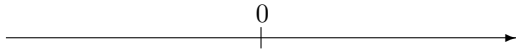
2. (1) +25 (2) -20 (3) -13 (4) +29 (5) +10

第1章 正の数、負の数 (減法1)

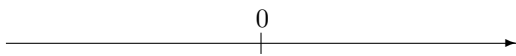
氏名 _____ 学習日 _____ 月 _____ 日

1. 次の計算をなさい。

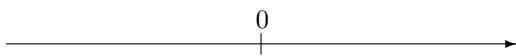
(1) $(-11) - (+18)$



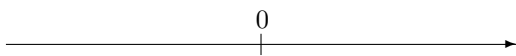
(2) $(+18) - (-5)$



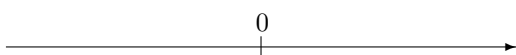
(3) $(-6) - (+3)$



(4) $(-7) - (-13)$

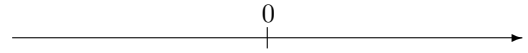


(5) $(-1) - (+10)$

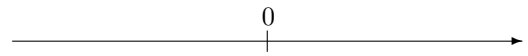


2. 次の計算をなさい。

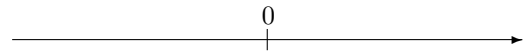
(1) $(+13) - (+3)$



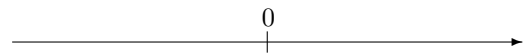
(2) $(-9) - (+2)$



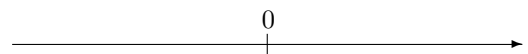
(3) $(+2) - (+11)$



(4) $(-7) - (-8)$



(5) $(-6) - (-15)$



第1章 正の数、負の数 (減法1) 解答

1. (1) $+7$ (2) $+23$ (3) -9 (4) $+6$ (5) -11

2. (1) $+10$ (2) -11 (3) -9 (4) $+1$ (5) $+9$