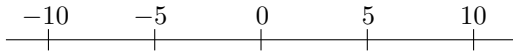


第1章 正の数、負の数 (加法3)

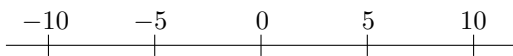
氏名 _____ 学習日 _____ 月 _____ 日

1. 次の計算をなさい。

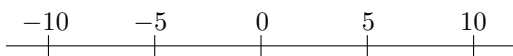
(1) $(+6) + (+4)$



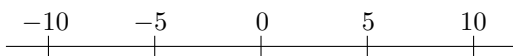
(2) $(+2) + (-9)$



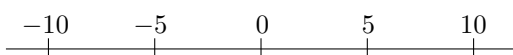
(3) $(+2) + (-10)$



(4) $(+5) + (+2)$

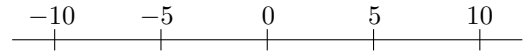


(5) $(-7) + (+8)$

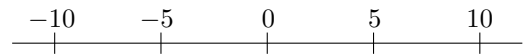


2. 次の計算をなさい。

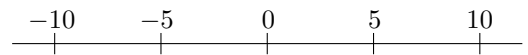
(1) $(-6) + (-5)$



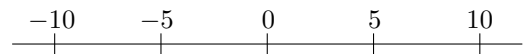
(2) $(+2) + (-5)$



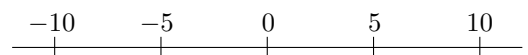
(3) $(+3) + (-9)$



(4) $(-1) + (-2)$



(5) $(-5) + (+8)$



第1章 正の数、負の数 (加法3) 解答

1. (1) $+10$ (2) -7 (3) -8 (4) $+7$ (5) $+1$

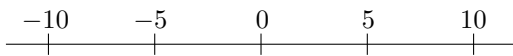
2. (1) -11 (2) -3 (3) -6 (4) -3 (5) $+3$

計算プリント（中1）

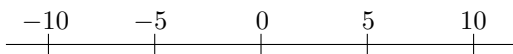
氏名 _____ 学習日 _____ 月 _____ 日 時間 _____

1. 次の計算をなさい。

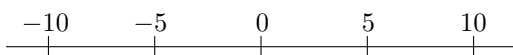
(1) $(+4) + (+8)$



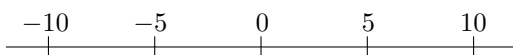
(2) $(+8) + (-10)$



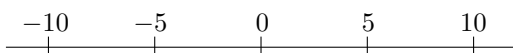
(3) $(+10) + (-7)$



(4) $(-8) + (-6)$

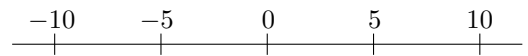


(5) $(-3) + (+8)$

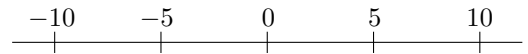


2. 次の計算をなさい。

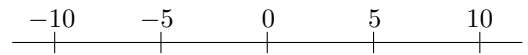
(1) $(+4) + (-3)$



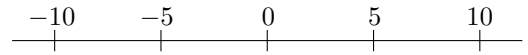
(2) $(-7) + (+9)$



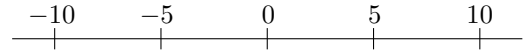
(3) $(-3) + (-8)$



(4) $(-1) + (+10)$



(5) $(+6) + (-1)$



第1章 正の数、負の数 (加法3) 解答

1. (1) $+12$ (2) -2 (3) $+3$ (4) -14 (5) $+5$

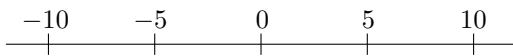
2. (1) $+1$ (2) $+2$ (3) -11 (4) $+9$ (5) $+5$

計算プリント（中1）

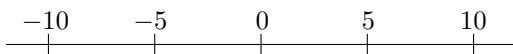
氏名 _____ 学習日 _____ 月 _____ 日 時間 _____

1. 次の計算をなさい。

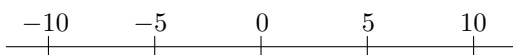
(1) $(-2) + (-4)$



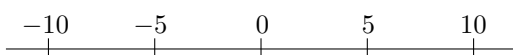
(2) $(-1) + (+4)$



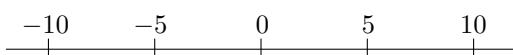
(3) $(+1) + (-6)$



(4) $(-5) + (-10)$

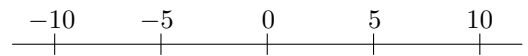


(5) $(+7) + (-9)$

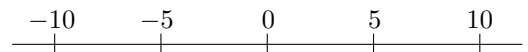


2. 次の計算をなさい。

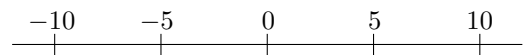
(1) $(+3) + (+4)$



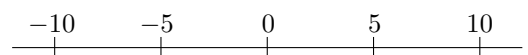
(2) $(+7) + (+5)$



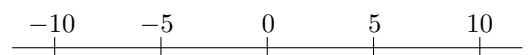
(3) $(-7) + (+9)$



(4) $(+2) + (-7)$



(5) $(-1) + (-4)$



第1章 正の数、負の数 (加法3) 解答

1. (1) -6 (2) $+3$ (3) -5 (4) -15 (5) -2

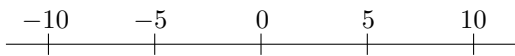
2. (1) $+7$ (2) $+12$ (3) $+2$ (4) -5 (5) -5

計算プリント（中1）

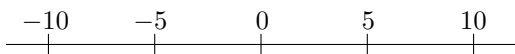
氏名 _____ 学習日 _____ 月 _____ 日 時間 _____

1. 次の計算をなさい。

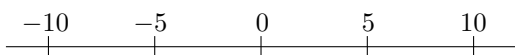
(1) $(-6) + (+7)$



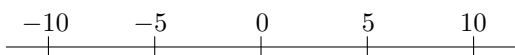
(2) $(-8) + (+5)$



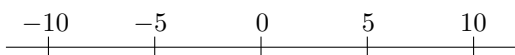
(3) $(+6) + (-4)$



(4) $(-6) + (+1)$

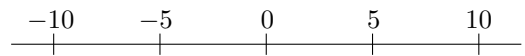


(5) $(+7) + (+4)$

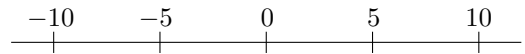


2. 次の計算をなさい。

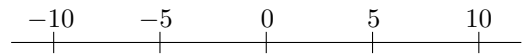
(1) $(+4) + (-8)$



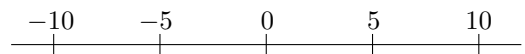
(2) $(-1) + (-5)$



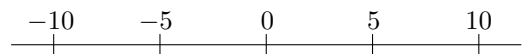
(3) $(+2) + (+1)$



(4) $(+3) + (+5)$



(5) $(-6) + (-8)$



第1章 正の数、負の数 (加法3) 解答

1. (1) $+1$ (2) -3 (3) $+2$ (4) -5 (5) $+11$

2. (1) -4 (2) -4 (3) $+3$ (4) $+8$ (5) -14