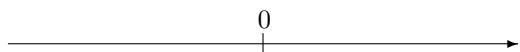


# 第1章 正の数、負の数 (加法4)

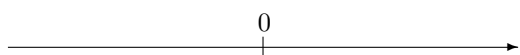
氏名 \_\_\_\_\_ 学習日 \_\_\_\_\_ 月 \_\_\_\_\_ 日

1. 次の計算をなさい。

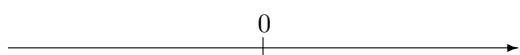
(1)  $(+3) + (-2)$



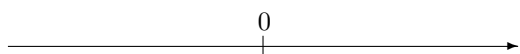
(2)  $(+5) + (-7)$



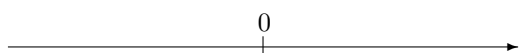
(3)  $(-4) + (-7)$



(4)  $(-9) + (+1)$

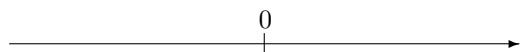


(5)  $(+5) + (-2)$

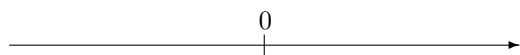


2. 次の計算をなさい。

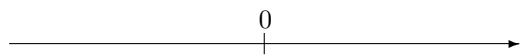
(1)  $(-3) + (-7)$



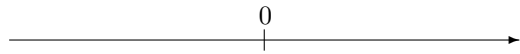
(2)  $(+2) + (-9)$



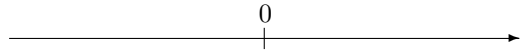
(3)  $(+1) + (-4)$



(4)  $(-9) + (-3)$



(5)  $(+6) + (+4)$



## 第1章 正の数、負の数 (加法4) 解答

1. (1) +1 (2) -2 (3) -11 (4) -8 (5) +3

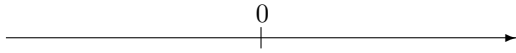
2. (1) -10 (2) -7 (3) -3 (4) -12 (5) +10

# 第1章 正の数、負の数 (加法4)

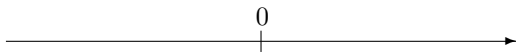
氏名 \_\_\_\_\_ 学習日 \_\_\_\_\_ 月 \_\_\_\_\_ 日

1. 次の計算をなさい。

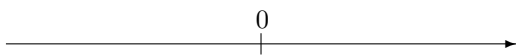
(1)  $(+7) + (-7)$



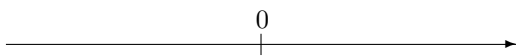
(2)  $(-4) + (-10)$



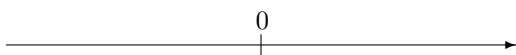
(3)  $(-4) + (+9)$



(4)  $(-9) + (+8)$

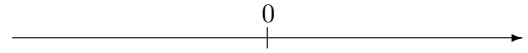


(5)  $(+5) + (+1)$

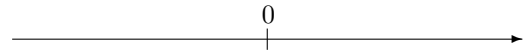


2. 次の計算をなさい。

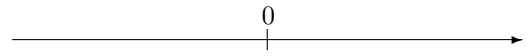
(1)  $(-2) + (+4)$



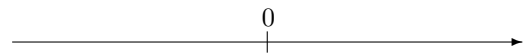
(2)  $(-5) + (+2)$



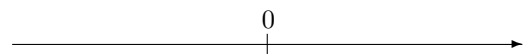
(3)  $(-9) + (+10)$



(4)  $(-1) + (-4)$



(5)  $(+7) + (+6)$



## 第1章 正の数、負の数 (加法4) 解答

1. (1) 0 (2)  $-14$  (3)  $+5$  (4)  $-1$  (5)  $+6$

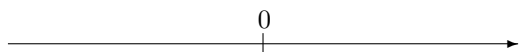
2. (1)  $+2$  (2)  $-3$  (3)  $+1$  (4)  $-5$  (5)  $+13$

# 第1章 正の数、負の数 (加法4)

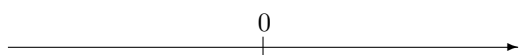
氏名 \_\_\_\_\_ 学習日 \_\_\_\_\_ 月 \_\_\_\_\_ 日

1. 次の計算をなさい。

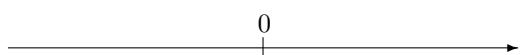
(1)  $(-2) + (+7)$



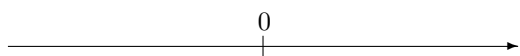
(2)  $(-7) + (+4)$



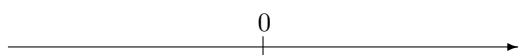
(3)  $(+9) + (-5)$



(4)  $(+2) + (+7)$

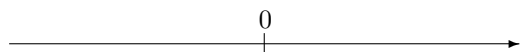


(5)  $(+7) + (+1)$

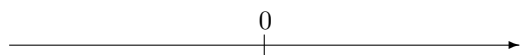


2. 次の計算をなさい。

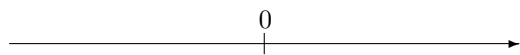
(1)  $(+3) + (+8)$



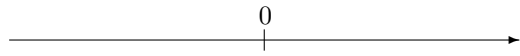
(2)  $(-6) + (-1)$



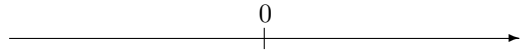
(3)  $(+5) + (+1)$



(4)  $(-2) + (-7)$



(5)  $(-5) + (+6)$



## 第1章 正の数、負の数 (加法4) 解答

1. (1)  $+5$  (2)  $-3$  (3)  $+4$  (4)  $+9$  (5)  $+8$

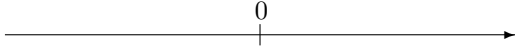
2. (1)  $+11$  (2)  $-7$  (3)  $+6$  (4)  $-9$  (5)  $+1$

# 第1章 正の数、負の数 (加法4)

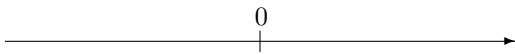
氏名 \_\_\_\_\_ 学習日 \_\_\_\_\_ 月 \_\_\_\_\_ 日

1. 次の計算をなさい。

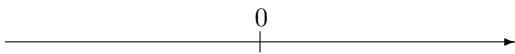
(1)  $(-4) + (+1)$



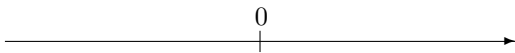
(2)  $(-6) + (+7)$



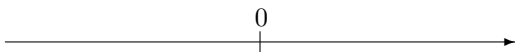
(3)  $(-8) + (-3)$



(4)  $(-7) + (+8)$

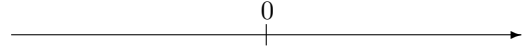


(5)  $(-8) + (+3)$

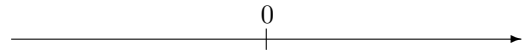


2. 次の計算をなさい。

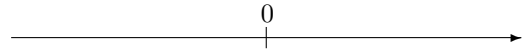
(1)  $(+3) + (-5)$



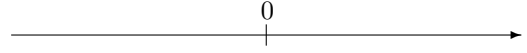
(2)  $(+7) + (+5)$



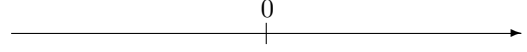
(3)  $(-6) + (-1)$



(4)  $(+7) + (+8)$



(5)  $(-9) + (-8)$



## 第1章 正の数、負の数 (加法4) 解答

1. (1)  $-3$  (2)  $+1$  (3)  $-11$  (4)  $+1$  (5)  $-5$

2. (1)  $-2$  (2)  $+12$  (3)  $-7$  (4)  $+15$  (5)  $-17$