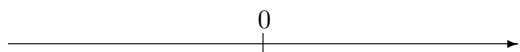


第1章 正の数、負の数 (加法5)

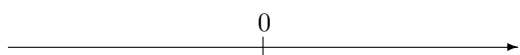
氏名 _____ 学習日 _____ 月 _____ 日

1. 次の計算をなさい。

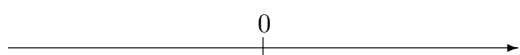
(1) $(-17) + (+9)$



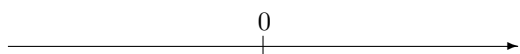
(2) $(+10) + (+12)$



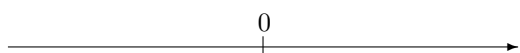
(3) $(+6) + (+17)$



(4) $(+16) + (+20)$

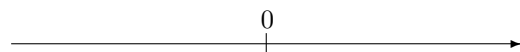


(5) $(+3) + (+3)$

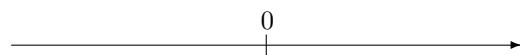


2. 次の計算をなさい。

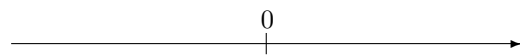
(1) $(+11) + (-10)$



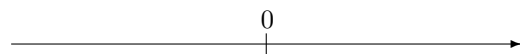
(2) $(+6) + (-12)$



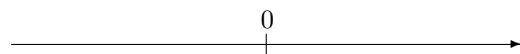
(3) $(+11) + (+4)$



(4) $(-2) + (-20)$



(5) $(+15) + (+10)$



第1章 正の数、負の数 (加法5) 解答

1. (1) -8 (2) $+22$ (3) $+23$ (4) $+36$ (5) $+6$

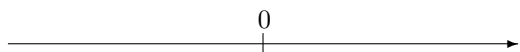
2. (1) $+1$ (2) -6 (3) $+15$ (4) -22 (5) $+25$

第1章 正の数、負の数 (加法5)

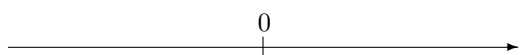
氏名 _____ 学習日 ____ 月 ____ 日

1. 次の計算をなさい。

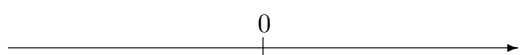
(1) $(+19) + (-2)$



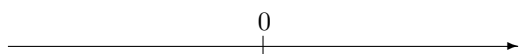
(2) $(+12) + (+15)$



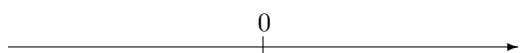
(3) $(-10) + (+19)$



(4) $(+14) + (-8)$

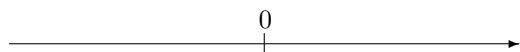


(5) $(-6) + (+4)$

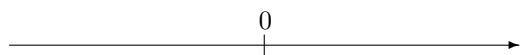


2. 次の計算をなさい。

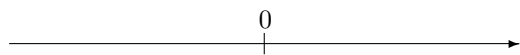
(1) $(-5) + (+15)$



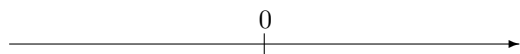
(2) $(+19) + (+11)$



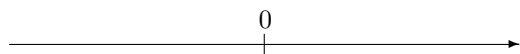
(3) $(-5) + (+12)$



(4) $(-14) + (-17)$



(5) $(-8) + (+15)$



第1章 正の数、負の数 (加法5) 解答

1. (1) $+17$ (2) $+27$ (3) $+9$ (4) $+6$ (5) -2

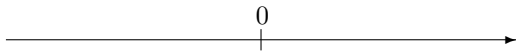
2. (1) $+10$ (2) $+30$ (3) $+7$ (4) -31 (5) $+7$

第1章 正の数、負の数 (加法5)

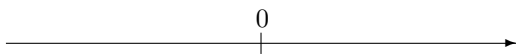
氏名 _____ 学習日 _____ 月 _____ 日

1. 次の計算をなさい。

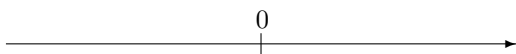
(1) $(+3) + (-14)$



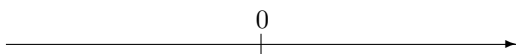
(2) $(+8) + (+9)$



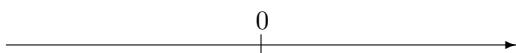
(3) $(+15) + (-13)$



(4) $(-9) + (+7)$

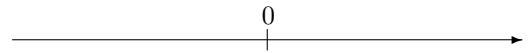


(5) $(+14) + (+7)$

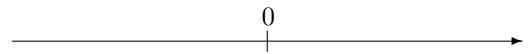


2. 次の計算をなさい。

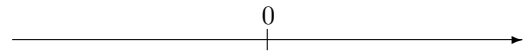
(1) $(+15) + (-10)$



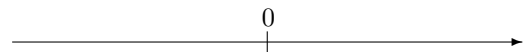
(2) $(-7) + (+13)$



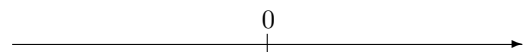
(3) $(+5) + (+18)$



(4) $(+19) + (-10)$



(5) $(+4) + (-6)$



第1章 正の数、負の数 (加法5) 解答

1. (1) -11 (2) $+17$ (3) $+2$ (4) -2 (5) $+21$

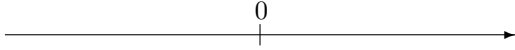
2. (1) $+5$ (2) $+6$ (3) $+23$ (4) $+9$ (5) -2

第1章 正の数、負の数 (加法5)

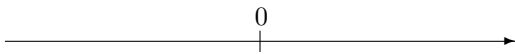
氏名 _____ 学習日 _____ 月 _____ 日

1. 次の計算をなさい。

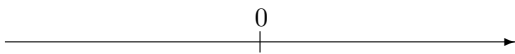
(1) $(-11) + (+18)$



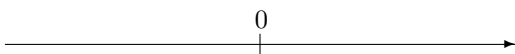
(2) $(+18) + (-5)$



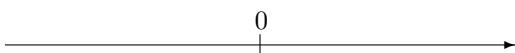
(3) $(-6) + (+3)$



(4) $(-7) + (-13)$

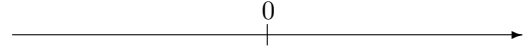


(5) $(-1) + (+10)$

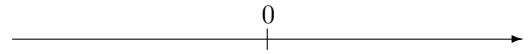


2. 次の計算をなさい。

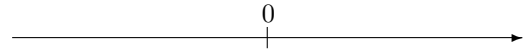
(1) $(+13) + (+3)$



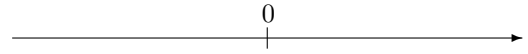
(2) $(-9) + (+2)$



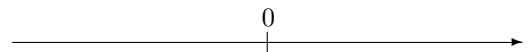
(3) $(+2) + (+11)$



(4) $(-7) + (-8)$



(5) $(-6) + (-15)$



第1章 正の数、負の数 (加法5) 解答

1. (1) $+7$ (2) $+13$ (3) -3 (4) -20 (5) $+9$

2. (1) $+16$ (2) -7 (3) $+13$ (4) -15 (5) -21